

“There is no one giant step that does it, it is a lot of little steps”

The grass so green,
the sun so bright.
Life seems a dream,
no worries in sight.

Tans and tank tops,
laughter and bliss.
Each moment passes
without even a miss.



Dear Parents

Summer Vacation! A long time to rejoice and recreate for all children. It is an appropriate period when the parents spend quality time with their children and try to discover their hidden potential, to realize their talents and raise their self-esteem.

- Encourage your child to take healthy food.
- Make sure that your child completes his/her homework neatly.
- Help your child inculcate good habits.
- Recite a story to your child and ask him/ her to narrate it.
- Converse with your child in English.



UTILISE THIS TIME TO THE FULLEST !!!



1. Project Work – “My English Scrapbook”

Make a colorful **English Scrapbook** with the following sections:

- **My Family and Friends** – Paste pictures/draw and write 5 sentences using **nouns** and **pronouns**.
- **Festivals I Love** – Choose a festival and write a **short paragraph** using **present and past tense**.

✨ *Decorate your scrapbook using drawings, cut-outs, or stickers!*

2. Brainstorming Activity – “Grammar Detective”

Create your own **Grammar Detective Notebook** and solve the following mysteries:

1. Find and write from the newspaper:
 - 5 **nouns** around you (one each: person, place, thing, animal, idea).
 - 3 examples of each **gender** (masculine, feminine, common, neuter).
 - 3 sentences each in:
 - **Simple Present Tense**
 - **Simple Past Tense**
 - **Simple Future Tense**
 - **Present Continuous Tense**
 - **Past Continuous Tense**
 - **Future Continuous Tense**

2. Underline the **articles** (a, an, the) in your sentences.

✍️ 3. Paragraph Writing

If I Had Superpowers.....

4. Draw an imaginary character of your own with superpowers and label it with adjectives.

English Grammar Mini Booklet

 **Name:** _____

Class: 5

Subject: English

A. Nouns & Gender

1. Fill in the blanks with suitable nouns:

(Choose your own nouns – person, place, animal, or thing)

- a. The _____ is flying in the sky.
 - b. My _____ helps me with my homework.
 - c. We went to the _____ to play.
 - d. I saw a _____ sleeping under the tree.
 - e. My favorite _____ is chocolate.
-

2. Rewrite the sentences by changing the gender of the underlined words:

- a. The king ruled the kingdom. → _____
- b. The boy is reading a book. → _____
- c. The uncle gave me a gift. → _____
- d. The lion roared loudly. → _____
- e. The father is cooking dinner. → _____
- f. The son is playing in the garden. → _____

B. Tenses

1. Rewrite each sentence in the tense mentioned:

- a. I play football every evening. *(Change to Past Tense)*

→ _____

- b. She watched a movie last night. *(Change to Future Tense)*

→ _____

- c. They are reading a storybook. *(Change to Past Continuous Tense)*

→ _____

- d. I will visit my grandmother. *(Change to Present Tense)*

→ _____

e. He was drawing a picture. (*Change to Future Continuous Tense*)

→ _____

f. We eat lunch at 1 p.m. (*Change to Present Continuous Tense*)

→ _____

2. Match the columns to identify the correct tense:

COLUMN A	COLUMN B
a) She sings a song.	1. Future Continuous Tense
b) They were dancing.	2. Simple Present Tense
c) He will be sleeping.	3. Present Continuous Tense
d) We are playing now.	4. Past Continuous Tense
e) I walked to school.	5. Simple Past Tense

C. Articles

1. Fill in the blanks using *a*, *an*, or *the*:

- He bought ___ pencil from the shop.
- We live on ___ Earth.
- She is eating ___ apple.
- I need ___ umbrella.
- He read ___ book about dinosaurs.

2. Circle the correct article in each sentence:

- She has (a / an / the) orange in her bag.
- I saw (a / an / the) eagle flying in the sky.
- He is (a / an / the) honest man.
- They went to (a / an / the) park near our school.
- We met (a / an / the) artist at the exhibition.

Instructions

- Use colorful pens and make your booklet creative!
- Write neatly.
- Don't forget to revise your answers before submission!

Submission Guidelines:

- Submit all work in a decorated file or scrapbook.
- Keep your work neat, colorful, and creative.
- Assignment to be done in the printout.



नोट: - १. गृह कार्य नोटपैड शीट पर करें।

२. गृह कार्य साफ-साफ लिखाई में करें।

क) इकाई परीक्षा में आने वाले पाठ्यक्रम को कंठस्थ कर लिखित अभ्यास करें।

ख) गिनती ५१-६० (51-60) दो-दो बार लिख कर याद करें।

ग) पर्यायवाची शब्द १-१० (1-10) दो-दो बार लिख कर याद करें।


घ) मुहावरे १-१० (1-10) दो-दो बार अर्थ लिखकर वाक्य बनाएँ।

ड.) स्पैक्ट्रम के लिए स्वरचित लेख या कविता लिखो।

1. निम्न शब्दों का वर्ण विच्छेद कीजिए:

- (१) दिन (२) किला (३) किसान (४) मीठा (५) टोकरी (६) बोतल (७) गोल
(८) ओखली (९) औरत (१०) नौकर

2. निम्नलिखित चित्र का 50-60 शब्दों में वर्णन कीजिए।



ज) अपने खाली समय में आप क्या करना पसंद करते हैं। 50-60 शब्दों में व्यक्त करके अनुच्छेद लिखें।

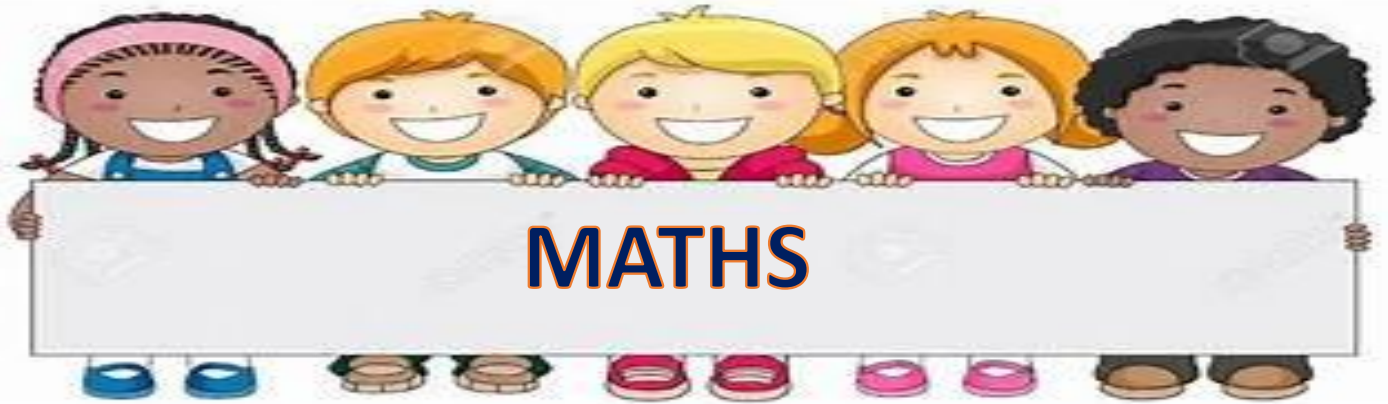
झ) गद्यांश को पढ़कर दिए गए प्रश्नों के उत्तर दीजिए।

वर्तमान काल को विज्ञापन का युग माना जाता है। समाचार - पत्रों के अतिरिक्त रेडियो और टेलीविजन भी विज्ञापन के सफल साधन हैं। विज्ञापन का मूल उद्देश्य उत्पादक और उपभोक्ता में सीधा संपर्क स्थापित करना होता है। जितना अधिक विज्ञापन किसी पदार्थ का होगा, उतनी ही उसकी लोकप्रियता बढ़ेगी। इन विज्ञापनों पर धन तो अधिक व्यय होता है परंतु इसमें बिक्री बढ़ जाती है। ग्राहक जब इन आकर्षक विज्ञापनों को देखता है, तो वह उस वस्तु - विशेष के प्रति आकृष्ट होकर उस वस्तु को खरीदने के लिए बाध्य हो जाता है।

प्रश्न-

- (१) वर्तमान युग में विज्ञापन के कौन-कौन से तीन साधन हैं?
- (२) उत्पादक विज्ञापनों पर धन व्यय क्यों करता है?
- (३) विज्ञापनों का ग्राहक के ऊपर क्या प्रभाव पड़ता है?
- (४) गद्यांश से कोई दो 'संज्ञा' शब्द में छांटकर लिखो।
- (५) 'बाध्य' का क्या अर्थ है?

ज) लक्षद्वीप / अंडमान और निकोबार महाद्वीपों पर A-3 साइज़ शीट पर कॉलाज बनाकर वहाँ के प्रमुख व्यंजनों, वेशभूषाओं, दार्शनिक स्थलों आदि का वर्णन कीजिए।



TO BE DONE IN NOTEPAD SHEETS:-

CASE STUDY BASED QUESTIONS

1. I am a 7 digit number my tens place is 4. My hundreds thousands place is 3. My hundreds place is twice the hundred thousands place. My thousand place is twice the tens place. My millions place is 2 less than the thousands place my one's place is one less than the hundred thousands place. My tens thousands place is 8. Who am I?
2. The annual revenue of five companies is given in the table below:-

Company	Annual Revenue (in Rupees)
Company A	7854321
Company B	12345678
Company C	9876543
Company D	3456789
Company E	5678901

Answer the questions that follow:-

- a. Which company has the third highest annual revenue?
- b. Which are the companies with the least and the most annual revenue in the list?
- c. What is the annual revenue earned by Company E. Also insert commas and write in words according to international system of Numeration.

d. What is the place value and face value of the underlined digit:- 9876543.

3. One day, Janvi went to the bank with her family. Her family needed to withdraw the following amounts from their account. Janvi helped her family by writing the amount in words on the withdrawal form. Can you guide Janvi in writing the amount according to international system.

Person	Amount
Mother	45098213
Father	65873455
Uncle	76092341
Grandfather	900076452

4. In a zoo 3 tigers road together at 12:30 p.m. if the tiger Roar regularly at the intervals of 15 18 24 minutes respectively then and what time will they Roar together again?

5. Seema has rupees 180. She wants to buy two types of items:-

i. packs of colourful pencils cost ₹15 each

ii. pack of erasers cost ₹18 each

What is the maximum number of packs of coloured pencils she can buy with ₹180, if she also wants to buy an equal number of packs of erasers.

6. ASSIGNMENT

Note :- Solve the given assignment on notepad sheets.

Q1. Write the number name in international system.

a) 76512009

b) 776655900

Q2. Write in words.

a) Four hundred twenty six million two hundred forty.

b) Three hundred million four hundred thousand five hundred.

Q3. Find the sum of place values of 2 and 3 in the number 7863421

Q4. Find the product using distributive property:

a) 8972×16

b) 63535×96

Q5. Find the number which when divided by 671 gives 234 as quotient and 23 as remainder.(Division Algorithm)

Q6. Divide and check $728345 \div 216$

Q7. Write 5 multiples of 675.

Q8. Find prime factorization of 456.

Q9. Fill in the blanks:

- a) Predecessor of 678990 is _____
- b) Factors of 56 are _____
- c) Write quotient and remainder when 6754 is divided by 100: Q = _____, R = _____.
- d) XLIV + V = _____
- e) L - XXX = _____
- f) Which number is the factor of all numbers _____?
- g) Which number is multiple of all numbers _____
- h) Every number is a multiple of which number _____
- i) Write multiple of 11 between 20 and 30 is _____
- j) Which of them is finite? Factors or Multiples _____
- k) Formula for area of rectangle is _____

Q10. Which is greater smallest 9- digit number of largest 8-digit number?

Q11. Form the smallest and greatest numbers using the digits 6, 0, 0 1, 4, 2

Q12. The difference between two numbers is 9254731. Find the bigger number if the smaller number is 4136851.

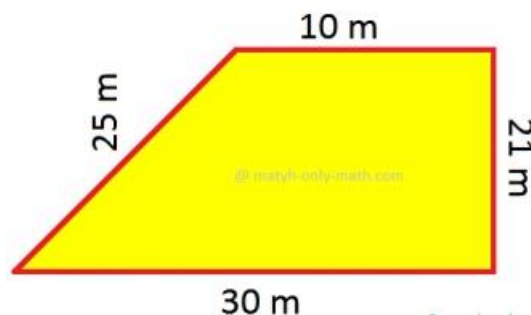
Q13. Find the sum of greatest 7-digit number, greatest 8-digit number and smallest 9- digit number.

Write the answer in words

Q14. A milk booth sells 53643L of milk per day. How many litres of milk will it sell in 3 years?

Q15. A carton contains 256 toys. How many cartons are required to pack 821760 toys?

Q16. Find perimeter of the figure:





Note:- Do it in the scrap file

Revise Ch1 and Ch 7 thoroughly

A) Soil and Rocks

- **Types of Soil:** Collect samples of different types of soil (sand, clay, loam) from your surroundings. Write a report about the properties of each soil type and which plants grow best in each type.
- **Rock Types:** Collect and label different types of rocks (igneous, sedimentary, and metamorphic). Write a description of each and where they are commonly found.

B) Conductors and Insulators

- **Materials Experiment:** Test various materials (like metal, plastic, rubber, wood, etc.) to see if they conduct electricity. Set up a simple circuit and replace the wires with different materials. Record which materials allow the current to pass through and which do not.
- **Make a List:** Make a list of materials found at home that are conductors (e.g., copper, aluminum) and insulators (e.g., rubber, plastic). Write a short explanation of why each type behaves the way it does.

C) Common Diseases and Their Prevention

- **Common Cold:** Write a report about the common cold, including:

The virus responsible

Symptoms

How to prevent it (hygiene, avoiding contact with sick people, etc.)

- **Malaria:** Research and explain how Malaria is transmitted, the symptoms, and how to prevent it (mosquito nets, anti-malarial medicines).
- **Dengue:** Write about Dengue Fever, its symptoms, the role of mosquitoes in spreading it, and preventive measures like eliminating mosquito breeding grounds.

D) Plant Growth

Grow a plant (such as a bean or sunflower) in a cup and keep a diary of its growth. Draw a picture of your plant every 2-3 days and describe the changes.



- Q.1) How will you explain the evolution in means of transport?
- Q.2) What kind of changes did the invention of wheels bring into our Lives?
- Q.3) What did the journey of Christopher Columbus, Vasco da Gama and Magellan prove?
- Q.4) Draw a flowchart and describe development in the means of transport.
- Q.5) What are local Institutions? Name them.
- Q.6) Social Media can be a powerful tool for raising awareness of local issues.How?
- Q.7) Who are community helpers? Describe any two of them and paste their pictures.
- Q.8) How do local Institutions help people in resolving issues?
- Q.9) Name and explain different causes of environmental pollution. How can we control it. Paste and draw pictures to support your answer.
- Q.10) Draw or paste pictures of any two natural disasters and write about them.



Q1. What are the colors of the National Flag of India?

a. _____

b. _____

c. _____

Q2. What is the significance of the Ashoka Chakra in the National Flag?

Q3. Who designed the National Flag of India?

Q4. What do the three colours of the national flag indicate?

Q5. What is the name of the game show hosted by Amitabh Bachchan?

Q6. What is the name of Amitabh Bachchan's father?

Q7. What do honey bees collect from flowers to make honey?

Q8. What is the Complex structure in which honey bees live called ?

Q9. Write 5 current affairs everyday.

Q10. Make a collage of any five ministers of India and write their duties.